

Name _____

Date _____ Grade _____

Complete each problem by filling in the missing value.

1.



8 di mes

+

6 quarters



=

\$ _____

2.



_____ quarters

+

4 di mes



= \$1.65

3.



7 quarters

+

_____ di mes



= \$2.45

4.



13 quarters

+

6 di mes



=

\$ _____

5.



_____ di mes

+

6 quarters



= \$1.70

6.



4 di mes

+

_____ quarters



= \$0.90

Name _____

Date _____ Grade _____

Complete each problem by filling in the missing value.

1.

11 dimes  + 9 quarters  = \$ _____

2.

_____ quarters  + 7 dimes  = \$1.45



3.

3 quarters  + _____ dimes  = \$1.35



4.

5 quarters  + 9 dimes  = \$ _____

5.

_____ dimes  + 2 quarters  = \$1.20

6.

14 dimes  + _____ quarters  = \$5.15

Name _____

Date _____ Grade _____

Complete each problem by filling in the missing value.

1.



9 dimes

+

6 quarters



= \$

2.



_____ quarters

+

7 dimes



= \$1.95

3.



3 quarters

+

_____ dimes



= \$1.65

4.



9 quarters

+

9 dimes



= \$

5.



_____ dimes

+

4 quarters



= \$1.50

6.



18 dimes

+

_____ quarters



= \$6.55

Answers

Page 1

1. \$2.30
2. 5
3. 7
4. \$3.85
5. 2
6. 2

Page 2

1. \$3.35
2. 3
3. 6
4. \$2.15
5. 7
6. 15

Page 3

1. \$2.40
2. 5
3. 9
4. \$3.15
5. 5
6. 19