

Name \_\_\_\_\_

Date \_\_\_\_\_ Grade \_\_\_\_\_

## Telling Time

Tell the time.



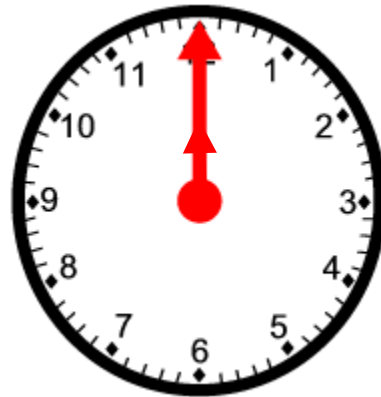
1.     :



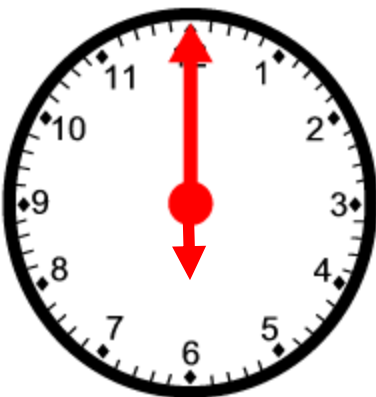
2.     :



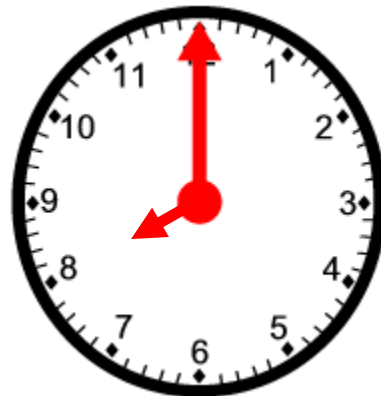
3.     :



4.     :



5.     :

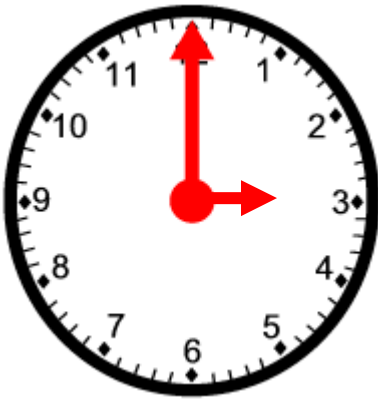


6.     :

Name \_\_\_\_\_

Date \_\_\_\_\_ Grade \_\_\_\_\_

### Telling Time - Tell the time.



1. :



2. :



3. :



4. :



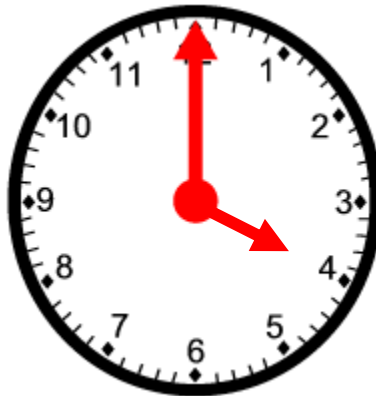
5. :



6. :



7. :



8. :



9. :

Name \_\_\_\_\_

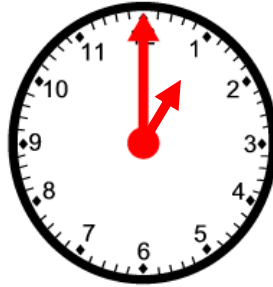
Date \_\_\_\_\_ Grade \_\_\_\_\_

## Telling Time

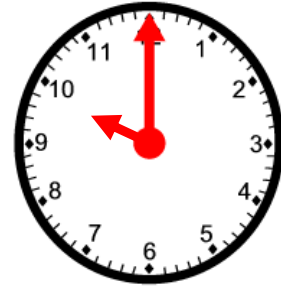
Write the time.



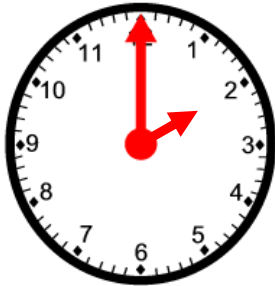
1.   :



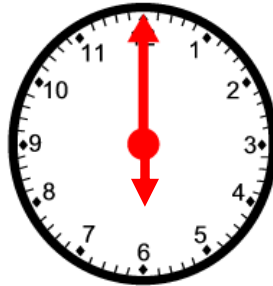
2.   :



3.   :



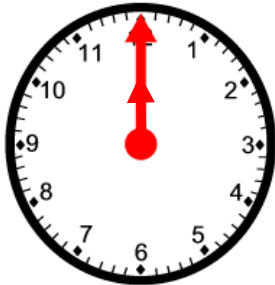
4.   :



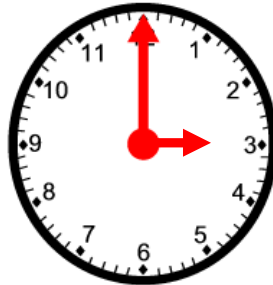
5.   :



6.   :



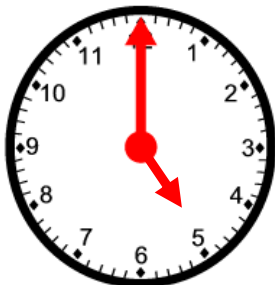
7.   :



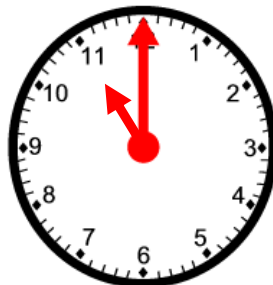
8.   :



9.   :



10.  :



11.  :



12.  :

## Answer Key

### Page 1

1. 7:00
2. 4:00
3. 11:00
4. 12:00
5. 6:00
6. 8:00

### Page 2

1. 3:00
2. 7:00
3. 5:00
4. 11:00
5. 2:00
6. 10:00
7. 1:00
8. 4:00
9. 9:00

### Page 3

1. 8:00
2. 1:00
3. 10:00
4. 2:00
5. 6:00
6. 4:00
7. 12:00
8. 3:00
9. 7:00
10. 5:00
11. 11:00
12. 9:00