

Name _____ Date _____

Basic Skills: Drawing Lines, Segments, and Rays #2

Independent Practice 1: Draw the lines, line segments, and rays.

1. Draw Line SD
2. Draw Line FG
3. Draw Line DJ
4. Draw Line segment YH
5. Draw Line segment ER
6. Draw Line segment PO
7. Draw Ray HF
8. Draw Ray ET
9. Draw Ray WE
10. Draw Ray LK

Name _____ Date _____

Basic Skills: Drawing Lines, Segments, and Rays #2

Independent Practice 2: Draw the lines, line segments, and rays.

1. Draw Line FK

2. Draw Line WR

3. Draw Line QR

4. Draw Line segment BU

5. Draw Line segment UC

6. Draw Line segment XU

7. Draw Line segment ZD

8. Draw Ray PX


9. Draw Ray LR

10. Draw Ray TU


Answer Key - Drawing Lines, Segments, and Rays #2

Independent Practice 1

1



2




3




4



5



6




7




8



9




10




Independent Practice 2

1



2




3




4



5



6




7



8



9



10

