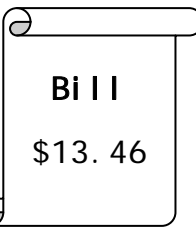
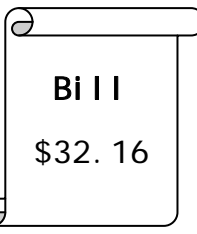
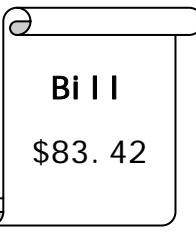
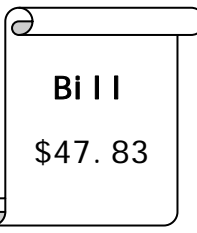
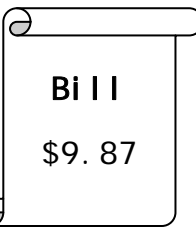
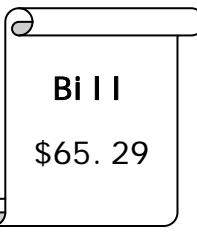
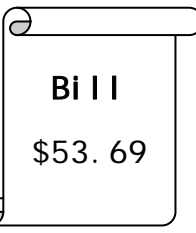
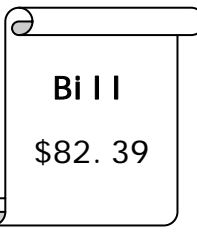
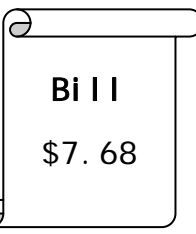
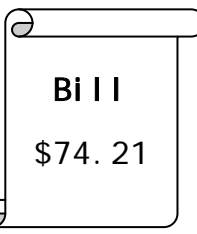


Name _____

Date _____ Grade _____

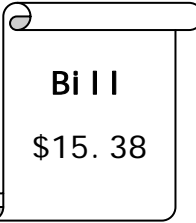

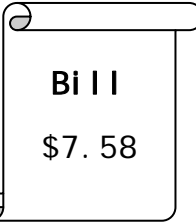
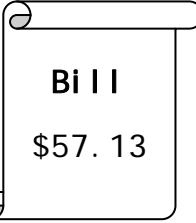

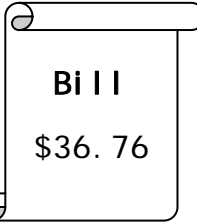
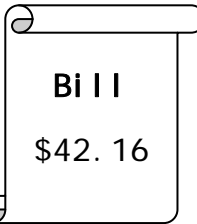
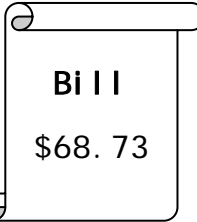
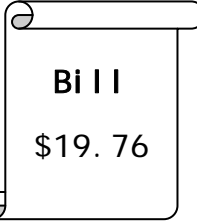

Pay the bill using the fewest possible bills/coins.

<p>1.</p>  <p>Bill \$13.46</p>	<p>___ pennies ___ \$1 Bills ___ nickels ___ \$5 Bills ___ dimes ___ \$10 Bills ___ quarters ___ \$20 Bills</p>
<p>2.</p>  <p>Bill \$32.16</p>	<p>___ pennies ___ \$1 Bills ___ nickels ___ \$5 Bills ___ dimes ___ \$10 Bills ___ quarters ___ \$20 Bills</p>
<p>3.</p>  <p>Bill \$83.42</p>	<p>___ pennies ___ \$1 Bills ___ nickels ___ \$5 Bills ___ dimes ___ \$10 Bills ___ quarters ___ \$20 Bills</p>
<p>4.</p>  <p>Bill \$47.83</p>	<p>___ pennies ___ \$1 Bills ___ nickels ___ \$5 Bills ___ dimes ___ \$10 Bills ___ quarters ___ \$20 Bills</p>
<p>5.</p>  <p>Bill \$9.87</p>	<p>___ pennies ___ \$1 Bills ___ nickels ___ \$5 Bills ___ dimes ___ \$10 Bills ___ quarters ___ \$20 Bills</p>
<p>6.</p>  <p>Bill \$65.29</p>	<p>___ pennies ___ \$1 Bills ___ nickels ___ \$5 Bills ___ dimes ___ \$10 Bills ___ quarters ___ \$20 Bills</p>
<p>7.</p>  <p>Bill \$53.69</p>	<p>___ pennies ___ \$1 Bills ___ nickels ___ \$5 Bills ___ dimes ___ \$10 Bills ___ quarters ___ \$20 Bills</p>
<p>8.</p>  <p>Bill \$82.39</p>	<p>___ pennies ___ \$1 Bills ___ nickels ___ \$5 Bills ___ dimes ___ \$10 Bills ___ quarters ___ \$20 Bills</p>
<p>9.</p>  <p>Bill \$7.68</p>	<p>___ pennies ___ \$1 Bills ___ nickels ___ \$5 Bills ___ dimes ___ \$10 Bills ___ quarters ___ \$20 Bills</p>
<p>10.</p>  <p>Bill \$74.21</p>	<p>___ pennies ___ \$1 Bills ___ nickels ___ \$5 Bills ___ dimes ___ \$10 Bills ___ quarters ___ \$20 Bills</p>

Name _____

Date _____ Grade _____

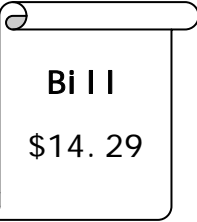
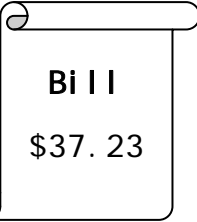
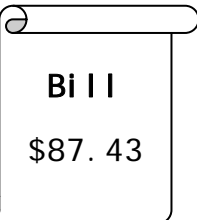
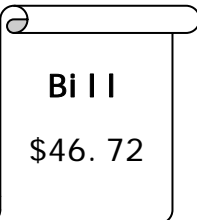

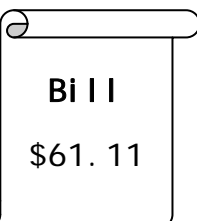
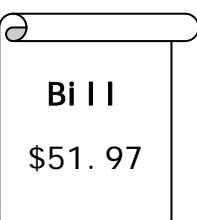
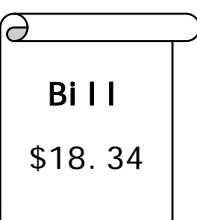
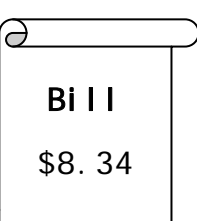
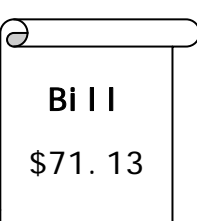
Pay the bill using the fewest possible bills/coins.

<p>1.</p>  <p>Bill \$15.38</p>	<p>___ pennies ___ \$1 Bills ___ nickels ___ \$5 Bills ___ dimes ___ \$10 Bills ___ quarters ___ \$20 Bills</p>
<p>3.</p>  <p>Bill \$85.93</p>	<p>___ pennies ___ \$1 Bills ___ nickels ___ \$5 Bills ___ dimes ___ \$10 Bills ___ quarters ___ \$20 Bills</p>
<p>5.</p>  <p>Bill \$7.58</p>	<p>___ pennies ___ \$1 Bills ___ nickels ___ \$5 Bills ___ dimes ___ \$10 Bills ___ quarters ___ \$20 Bills</p>
<p>7.</p>  <p>Bill \$57.13</p>	<p>___ pennies ___ \$1 Bills ___ nickels ___ \$5 Bills ___ dimes ___ \$10 Bills ___ quarters ___ \$20 Bills</p>
<p>9.</p>  <p>Bill \$3.21</p>	<p>___ pennies ___ \$1 Bills ___ nickels ___ \$5 Bills ___ dimes ___ \$10 Bills ___ quarters ___ \$20 Bills</p>
<p>2.</p>  <p>Bill \$36.76</p>	<p>___ pennies ___ \$1 Bills ___ nickels ___ \$5 Bills ___ dimes ___ \$10 Bills ___ quarters ___ \$20 Bills</p>
<p>4.</p>  <p>Bill \$42.16</p>	<p>___ pennies ___ \$1 Bills ___ nickels ___ \$5 Bills ___ dimes ___ \$10 Bills ___ quarters ___ \$20 Bills</p>
<p>6.</p>  <p>Bill \$68.73</p>	<p>___ pennies ___ \$1 Bills ___ nickels ___ \$5 Bills ___ dimes ___ \$10 Bills ___ quarters ___ \$20 Bills</p>
<p>8.</p>  <p>Bill \$19.76</p>	<p>___ pennies ___ \$1 Bills ___ nickels ___ \$5 Bills ___ dimes ___ \$10 Bills ___ quarters ___ \$20 Bills</p>
<p>10.</p>  <p>Bill \$72.89</p>	<p>___ pennies ___ \$1 Bills ___ nickels ___ \$5 Bills ___ dimes ___ \$10 Bills ___ quarters ___ \$20 Bills</p>

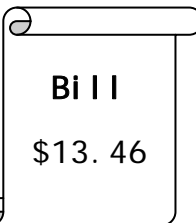
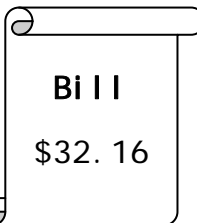
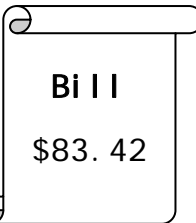
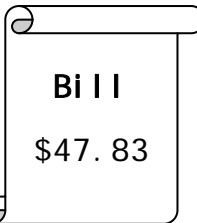
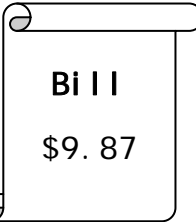
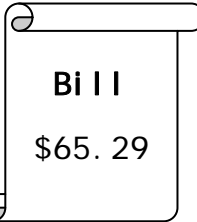
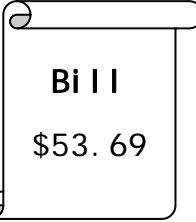
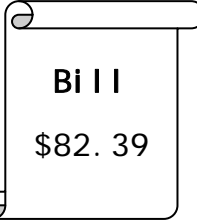
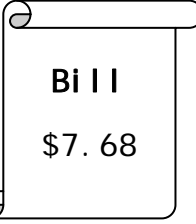

Name _____

Date _____ Grade _____

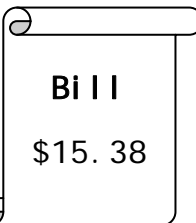
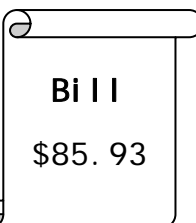
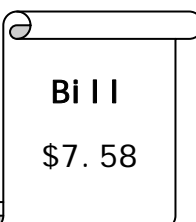
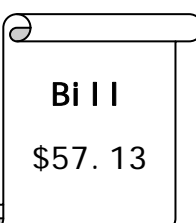
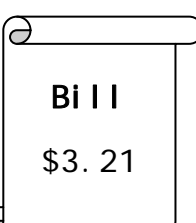

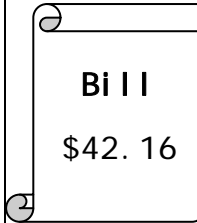
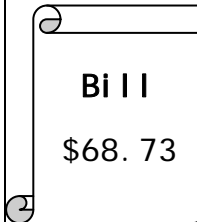


Pay the bill using the fewest possible bills/coins.

1.  Bill \$14.29	___ pennies ___ \$1 Bills ___ nickels ___ \$5 Bills ___ dimes ___ \$10 Bills ___ quarters ___ \$20 Bills	2.  Bill \$37.23	___ pennies ___ \$1 Bills ___ nickels ___ \$5 Bills ___ dimes ___ \$10 Bills ___ quarters ___ \$20 Bills
3.  Bill \$87.43	___ pennies ___ \$1 Bills ___ nickels ___ \$5 Bills ___ dimes ___ \$10 Bills ___ quarters ___ \$20 Bills	4.  Bill \$46.72	___ pennies ___ \$1 Bills ___ nickels ___ \$5 Bills ___ dimes ___ \$10 Bills ___ quarters ___ \$20 Bills
5.  Bill \$6.66	___ pennies ___ \$1 Bills ___ nickels ___ \$5 Bills ___ dimes ___ \$10 Bills ___ quarters ___ \$20 Bills	6.  Bill \$61.11	___ pennies ___ \$1 Bills ___ nickels ___ \$5 Bills ___ dimes ___ \$10 Bills ___ quarters ___ \$20 Bills
7.  Bill \$51.97	___ pennies ___ \$1 Bills ___ nickels ___ \$5 Bills ___ dimes ___ \$10 Bills ___ quarters ___ \$20 Bills	8.  Bill \$18.34	___ pennies ___ \$1 Bills ___ nickels ___ \$5 Bills ___ dimes ___ \$10 Bills ___ quarters ___ \$20 Bills
9.  Bill \$8.34	___ pennies ___ \$1 Bills ___ nickels ___ \$5 Bills ___ dimes ___ \$10 Bills ___ quarters ___ \$20 Bills	10.  Bill \$71.13	___ pennies ___ \$1 Bills ___ nickels ___ \$5 Bills ___ dimes ___ \$10 Bills ___ quarters ___ \$20 Bills


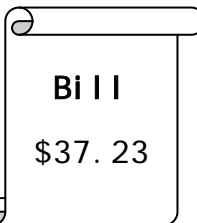
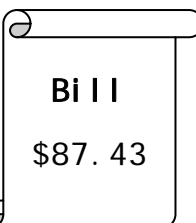

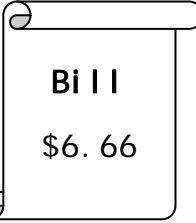
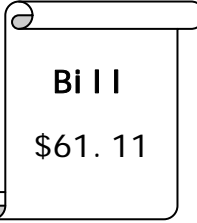
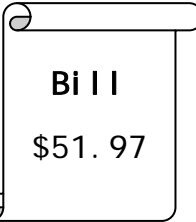
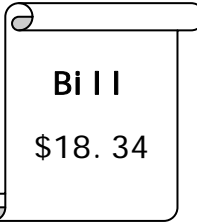
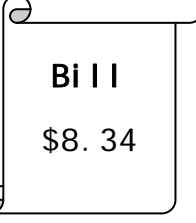

Page 1 Answer Key: using the fewest bills/coins.

<p>1.</p>  <p>Bill \$13.46</p>	<p>1 pennies 3 \$1 Bills 2 dimes 1 \$10 Bills 1 quarters</p>	<p>2.</p>  <p>Bill \$32.16</p>	<p>1 pennies 2 \$1 Bills 1 nickels 1 dimes 1 \$10 Bills 1 \$20 Bills</p>
<p>3.</p>  <p>Bill \$83.42</p>	<p>2 pennies 3 \$1 Bills 1 nickels 1 dimes 1 quarters 4 \$20 Bills</p>	<p>4.</p>  <p>Bill \$47.83</p>	<p>3 pennies 2 \$1 Bills 1 nickels 1 \$5 Bills 3 quarters 2 \$20 Bills</p>
<p>5.</p>  <p>Bill \$9.87</p>	<p>2 pennies 4 \$1 Bills 1 dimes 1 \$5 Bills 3 quarters</p>	<p>6.</p>  <p>Bill \$65.29</p>	<p>4 pennies 1 \$5 Bills 1 quarters 3 \$20 Bills</p>
<p>7.</p>  <p>Bill \$53.69</p>	<p>4 pennies 3 \$1 Bills 1 nickels 1 dimes 1 \$10 Bills 2 quarters 2 \$20 Bills</p>	<p>8.</p>  <p>Bill \$82.39</p>	<p>4 pennies 2 \$1 Bills 1 dimes 1 quarters 4 \$20 Bills</p>
<p>9.</p>  <p>Bill \$7.68</p>	<p>3 pennies 2 \$1 Bills 1 nickels 1 \$5 Bills 1 dimes 2 quarters</p>	<p>10.</p>  <p>Bill \$74.21</p>	<p>1 pennies 4 \$1 Bills 2 dimes 1 \$10 Bills 3 \$20 Bills</p>

Page 2 Answer Key: using the fewest bills/coins.

<p>1.</p>  <p>Bill \$15.38</p>	<p>3 pennies 1 \$5 Bills 1 dimes 1 quarters</p> <p>1 \$10 Bills</p>
<p>3.</p>  <p>Bill \$85.93</p>	<p>3 pennies 1 nickels 1 dimes 3 quarters</p> <p>1 \$5 Bills 4 \$20 Bills</p>
<p>5.</p>  <p>Bill \$7.58</p>	<p>3 pennies 1 nickels 2 quarters</p> <p>2 \$1 Bills 1 \$5 Bills</p>
<p>7.</p>  <p>Bill \$57.13</p>	<p>3 pennies 1 dimes</p> <p>2 \$1 Bills 1 \$5 Bills 1 \$10 Bills 2 \$20 Bills</p>
<p>9.</p>  <p>Bill \$3.21</p>	<p>1 pennies 2 dimes</p> <p>3 \$1 Bills</p>
<p>2.</p>  <p>Bill \$36.76</p>	<p>3 pennies 3 quarters</p> <p>1 \$1 Bills 1 \$5 Bills 1 \$10 Bills 1 \$20 Bills</p>
<p>4.</p>  <p>Bill \$42.16</p>	<p>1 pennies 1 nickels 1 dimes</p> <p>2 \$1 Bills 2 \$20 Bills</p>
<p>6.</p>  <p>Bill \$68.73</p>	<p>3 pennies 2 dimes 2 quarters</p> <p>3 \$1 Bills 1 \$5 Bills 3 \$20 Bills</p>
<p>8.</p>  <p>Bill \$19.76</p>	<p>1 pennies</p> <p>4 \$1 Bills 1 \$5 Bills 1 \$10 Bills</p> <p>3 quarters</p>
<p>10.</p>  <p>Bill \$72.89</p>	<p>4 pennies 1 dimes 3 quarters</p> <p>2 \$1 Bills 1 \$10 Bills 3 \$20 Bills</p>

Page 3 Answer Key: using the fewest bills/coins.

<p>1.</p>  <p>Bill \$14.29</p>	<p>4 pennies 4 \$1 Bills 1 \$10 Bills 1 quarters</p>	<p>2.</p>  <p>Bill \$37.23</p>	<p>3 pennies 2 \$1 Bills 1 \$5 Bills 2 dimes 1 \$10 Bills 1 \$20 Bills</p>
<p>3.</p>  <p>Bill \$87.43</p>	<p>3 pennies 2 \$1 Bills 1 nickels 1 \$5 Bills 1 dimes 1 quarters 4 \$20 Bills</p>	<p>4.</p>  <p>Bill \$46.72</p>	<p>2 pennies 1 \$1 Bills 1 \$5 Bills 2 dimes 2 quarters 2 \$20 Bills</p>
<p>5.</p>  <p>Bill \$6.66</p>	<p>1 pennies 1 \$1 Bills 1 nickels 1 \$5 Bills 1 dimes 2 quarters</p>	<p>6.</p>  <p>Bill \$61.11</p>	<p>1 pennies 1 \$1 Bills 1 dimes 3 \$20 Bills</p>
<p>7.</p>  <p>Bill \$51.97</p>	<p>2 pennies 1 \$1 Bills 2 dimes 1 \$10 Bills 3 quarters 2 \$20 Bills</p>	<p>8.</p>  <p>Bill \$18.34</p>	<p>4 pennies 3 \$1 Bills 1 nickels 1 \$5 Bills 1 \$10 Bills 1 quarters</p>
<p>9.</p>  <p>Bill \$8.34</p>	<p>4 pennies 3 \$1 Bills 1 nickels 1 \$5 Bills 1 quarters</p>	<p>10.</p>  <p>Bill \$71.13</p>	<p>3 pennies 1 \$1 Bills 1 dimes 1 \$10 Bills 3 \$20 Bills</p>