


Name \_\_\_\_\_

Date \_\_\_\_\_ Grade \_\_\_\_\_

**Write the missing numbers. Draw a picture in the box to complete the number sentence.**



+



= 6

\_\_\_\_\_


+

\_\_\_\_\_

= 6



+




= 5

\_\_\_\_\_

+

\_\_\_\_\_

= 5



+



= 4

\_\_\_\_\_

+

\_\_\_\_\_

= 4


Name \_\_\_\_\_

Date \_\_\_\_\_ Grade \_\_\_\_\_

**Write the missing numbers. Draw a picture in the box to complete the number sentence.**



+



= 3

\_\_\_\_\_


+

\_\_\_\_\_

= 3



+




= 4

\_\_\_\_\_

+

\_\_\_\_\_

= 4



+



= 7

\_\_\_\_\_

+

\_\_\_\_\_

= 7


Name \_\_\_\_\_

Date \_\_\_\_\_ Grade \_\_\_\_\_

**Write the missing numbers. Draw a picture in the box to complete the number sentence.**



+




= 6

\_\_\_\_\_


+

\_\_\_\_\_

= 6



+




= 6

\_\_\_\_\_

+

\_\_\_\_\_

= 6



+



= 9

\_\_\_\_\_

+

\_\_\_\_\_

= 9

Name \_\_\_\_\_

Date \_\_\_\_\_ Grade \_\_\_\_\_

**Write the numbers under the pictures to make a number sentence.**



+



\_\_\_\_\_

+

\_\_\_\_\_

=

\_\_\_\_\_



+



\_\_\_\_\_

+

\_\_\_\_\_

=

\_\_\_\_\_



+



\_\_\_\_\_

+

\_\_\_\_\_

=

\_\_\_\_\_



+



\_\_\_\_\_

+

\_\_\_\_\_

=

\_\_\_\_\_

Name \_\_\_\_\_

Date \_\_\_\_\_ Grade \_\_\_\_\_

**Write the numbers under the pictures to make a number sentence.**



+




\_\_\_\_\_

+

\_\_\_\_\_

=

\_\_\_\_\_



+



\_\_\_\_\_

+

\_\_\_\_\_

=

\_\_\_\_\_



+




\_\_\_\_\_

+


\_\_\_\_\_

=

\_\_\_\_\_



+



\_\_\_\_\_

+

\_\_\_\_\_

=

\_\_\_\_\_